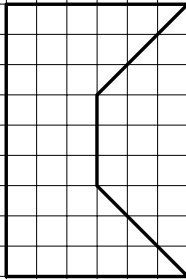


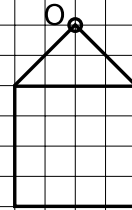
Exercice GMO-IH-12

Dessine l'homothétie de chacune des figures ci-dessous selon le rapport k et le centre O donnés.

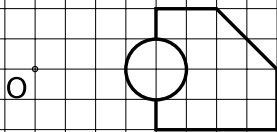


$k = 1/3$

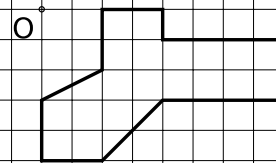
O



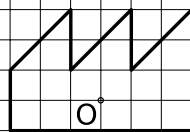
$k = 2$



$k = 2$

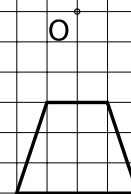


$k = 2$



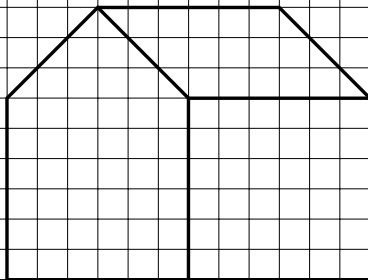
$k = 2$

O



$k = 3$

O



$k = 2/3$

O