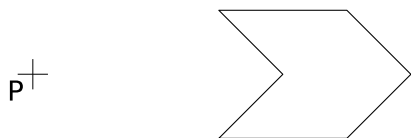


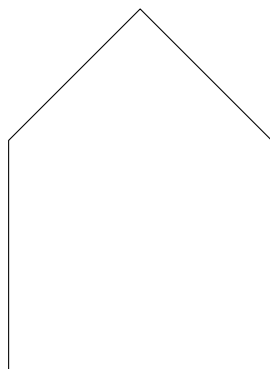
Exercice GMO-IH-27

A l'aide d'une construction géométrique, construis l'image des figures ci-dessous, selon une homothétie de centre P et de rapport k donnés.

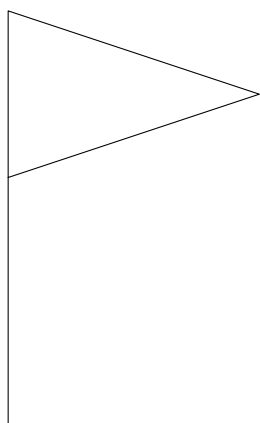
k=2



k=0.5



k=1.5



k=0.6

