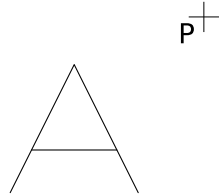


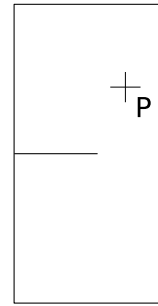
Exercice GMO-IH-28

A l'aide d'une construction géométrique, construis l'image des figures ci-dessous, selon une homothétie de centre P et de rapport k donnés.

k=3

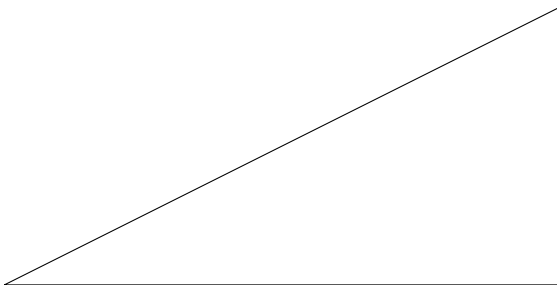


k=2



k=0.5

P



k=1.5

