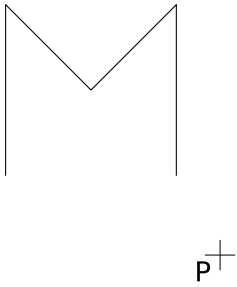


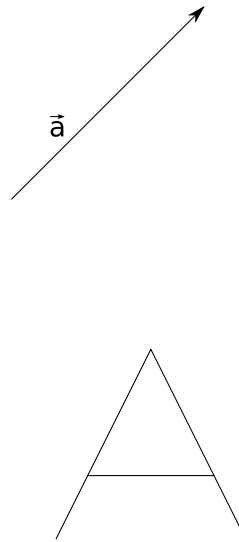
# Exercice GMO-IH-36

A l'aide d'une construction géométrique, construis l'image des figures ci-dessous, selon la transformation indiquée.

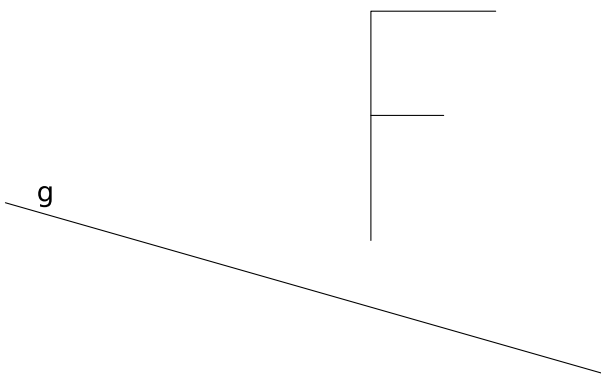
Transformation:  $S(P)$



Transformation:  $\mathcal{T}(\vec{a})$



Transformation:  $S(g)$



Transformation:  $\mathcal{R}(A; -120^\circ)$

