


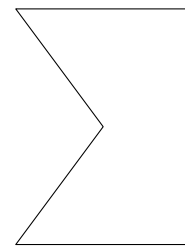
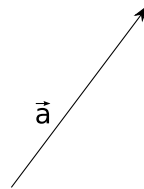
# Exercice GMO-IH-37

A l'aide d'une construction géométrique, construis l'image des figures ci-dessous, selon la transformation indiquée.

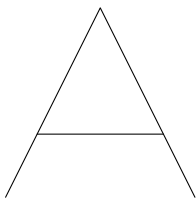
Transformation:  $\mathcal{T}(\vec{v})$



Transformation:  $\mathcal{T}(\vec{a})$




Transformation:  $S(f)$



f

Transformation:  $S(g)$



g