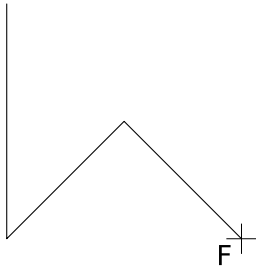


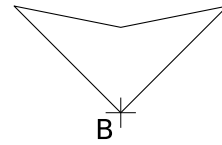
# Exercice GMO-IH-39

A l'aide d'une construction géométrique, construis l'image des figures ci-dessous, selon la transformation indiquée.

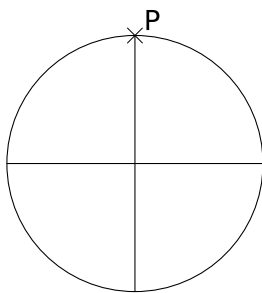
Transformation:  $S(F)$



Transformation:  $\mathcal{H}(B; -2)$



Transformation:  $\mathcal{H}(P; 2)$



Transformation:  $S(A)$

