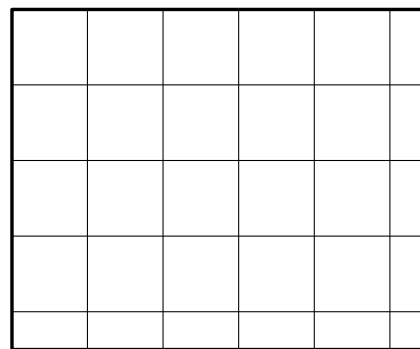
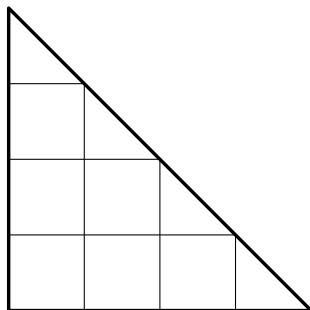
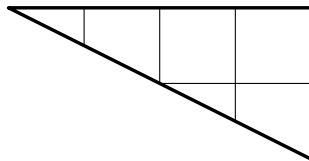
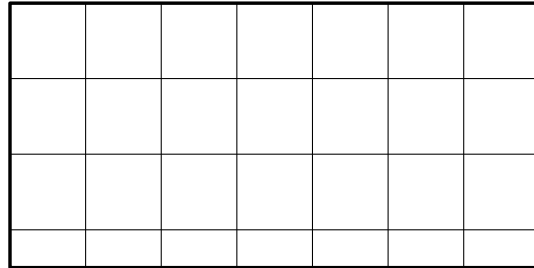
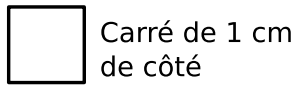


## Exercice GMO-PAV-7

a) Détermine combien de petits carrés de 1 cm de côté il faut pour couvrir la surface de chaque figure ci-dessous.



b) Calcule l'aire (la surface) de chaque figure ci-dessous.

