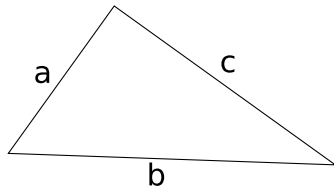


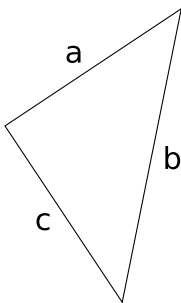
## Exercice GMO-PY-6

Pour chaque triangle rectangle ci-dessous, écris la formule qui permet de calculer la longueur du côté demandé à partir des deux autres.

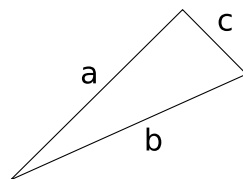
Exemple:



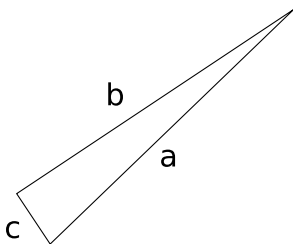
$$a = \sqrt{b^2 - c^2}$$



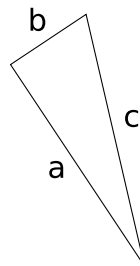
$b =$



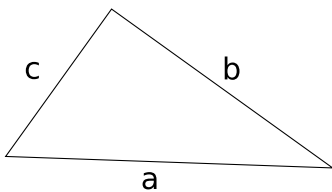
$c =$



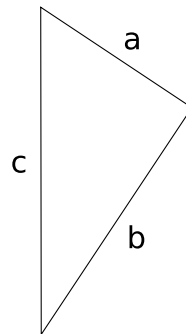
$b =$



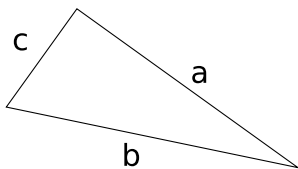
$c =$



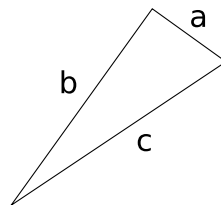
$c =$



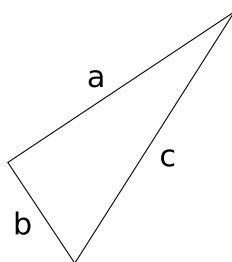
$b =$



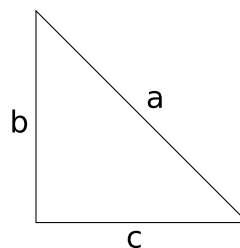
$a =$



$a =$



$a =$



$a =$