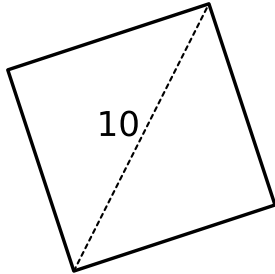


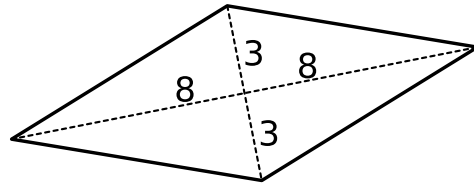
## Exercice GMO-PY-7

Calcule le périmètre  $p$  et l'aire  $A$  des polygones suivants.

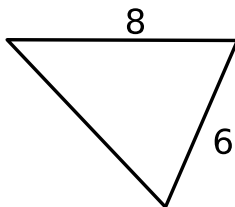
a) un carré



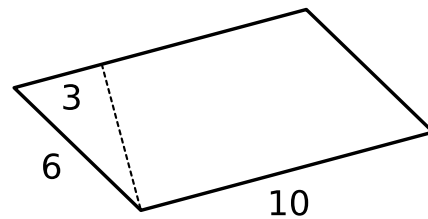
e) un losange



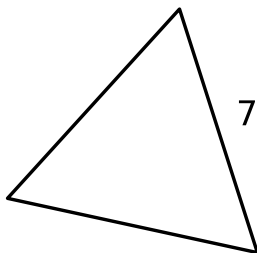
b) un triangle isocèle



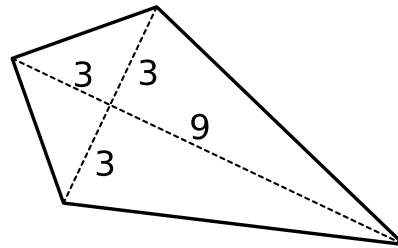
f) un parallélogramme



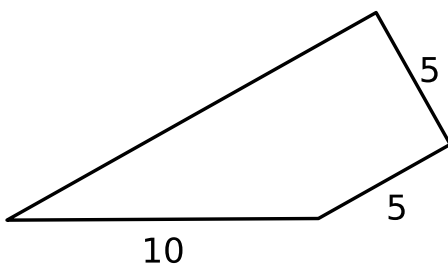
c) un triangle équilatéral



g) un rhomboïde



d) un trapèze rectangle



h) un trapèze isocèle

